
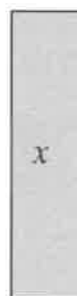


Label the side lengths of each figure below. Use color to show the lengths that are the same as one another. Then find the perimeter and the area of each figure and put it into the appropriate space. Write it in simplest form by combining like terms.



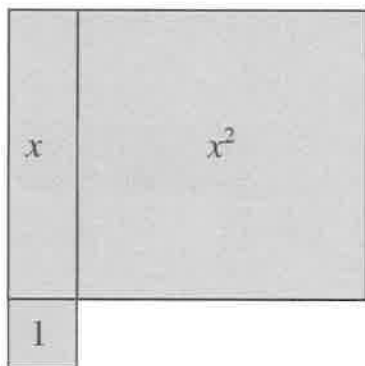
A:  
P:




A:  
P:




A:  
P:



A:  
P:



A:  
P:



A:  
P: